




COMPLETA TU LA CARTA PER FORMARE 10 E POI
SCRIVI LE ADDIZIONI.




$$5 + \dots = 10$$




$$2 + \dots = 10$$




$$7 + \dots = 10$$




$$\dots + \dots = 10$$



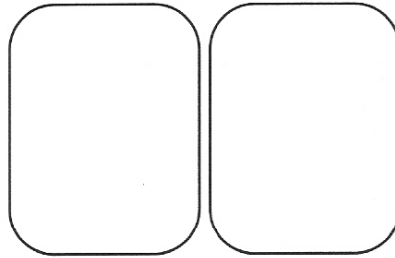
$$\dots + \dots = 10$$




$$\dots + \dots = 10$$



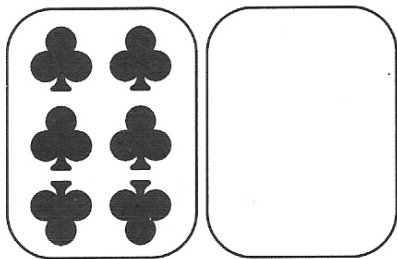
$$\dots + \dots = 10$$



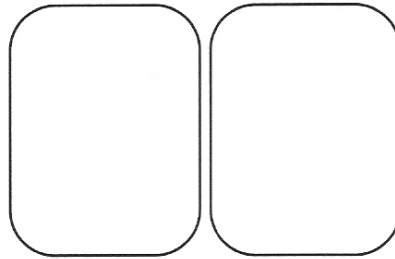
$$\dots + \dots = 10$$




$$\dots + \dots = 10$$



$$\dots + \dots = 10$$



$$\dots + \dots = 10$$




$$\dots + \dots = 10$$

COMPLETA SCRIVENDO I NUMERI CHE MANCANO.


| | | | |
|------------------|------------------|------------------|------------------|
| $10 = 5 + \dots$ | $7 + 3 = \dots$ | $10 - 4 = \dots$ | $10 - \dots = 7$ |
| $6 + \dots = 10$ | $2 + 8 = \dots$ | $10 - \dots = 6$ | $7 = 10 - \dots$ |
| $8 + \dots = 10$ | $10 = \dots + 6$ | $10 - \dots = 0$ | $10 - 1 = \dots$ |

COLORA IL DISEGNO A SECONDA DEL RISULTATO.

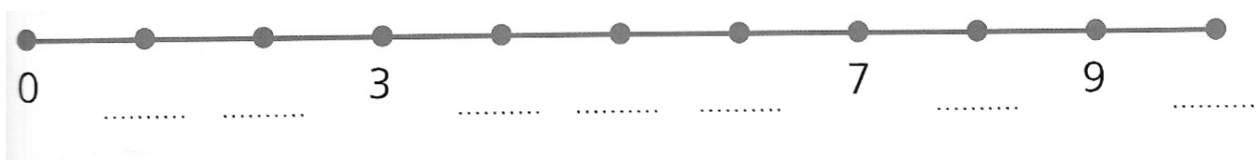
- $10 - 2 = \dots \rightarrow$ VERDE
- $10 - 1 = \dots \rightarrow$ ROSSO
- $10 - 4 = \dots \rightarrow$ BLU
- $10 - 5 = \dots \rightarrow$ GIALLO



COLORA DELLO STESSO COLORE LE NUVOLE CHE INSIEME FORMANO UNA DECINA.



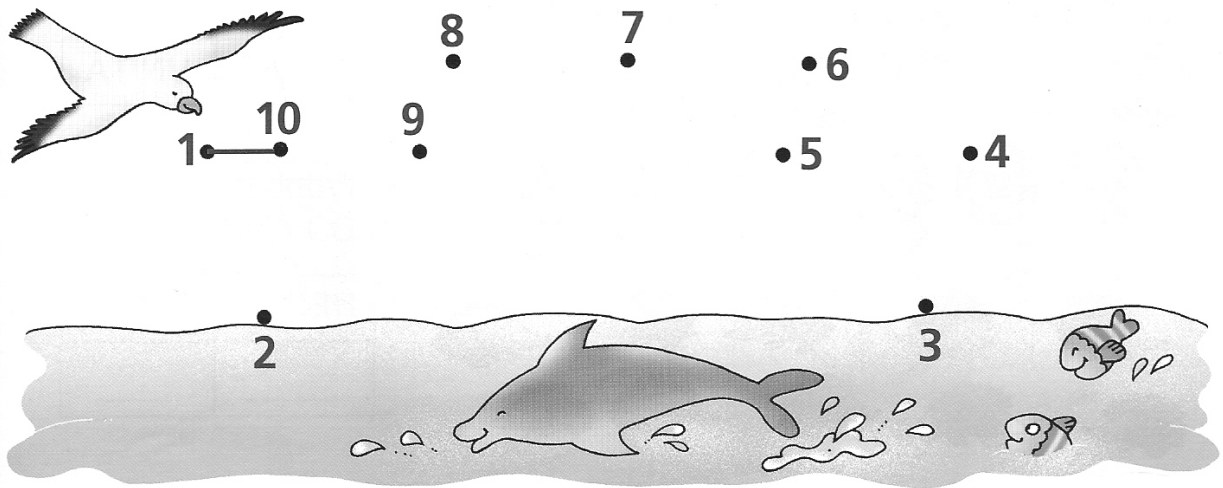
SCRIVI SULLA LINEA I NUMERI CHE MANCANO.



COLORA DI GIALLO I NUMERI MINORI DI 10.



UNISCI I PUNTINI DA 1 A 10. CHE COSA APPARE?

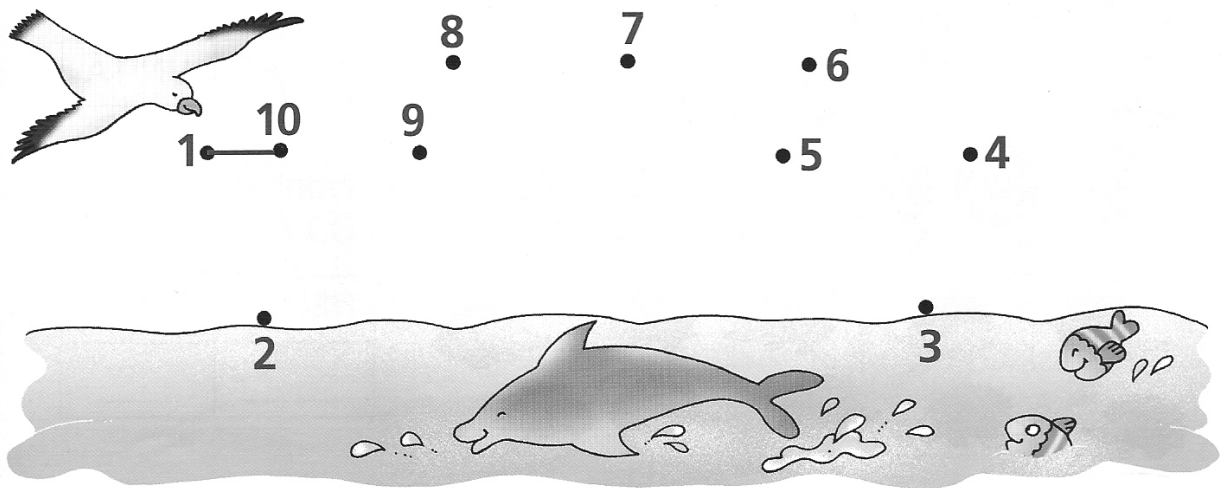


È APPARSA

COLORA DI GIALLO I NUMERI MINORI DI 10.



UNISCI I PUNTINI DA 1 A 10. CHE COSA APPARE?



È APPARSA