

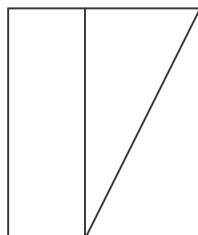
## UNITÀ DI ESERCITAZIONE.



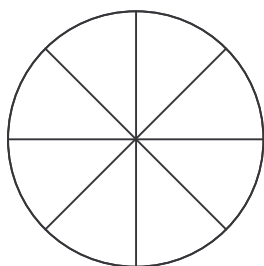
Indica se la figura è stata frazionata:



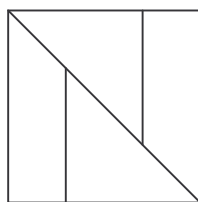
- Sì
- No



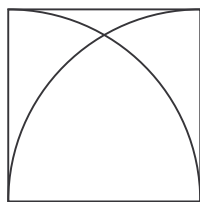
- Sì
- No




- Sì
- No



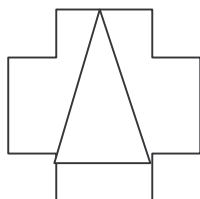
- Sì
- No



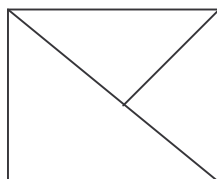
- Sì
- No




- Sì
- No




- Sì
- No



- Sì
- No




Cerchia l'unità frazionaria corrispondente alla parte colorata e poi scrivila in parola:



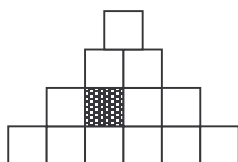
$$\frac{1}{2} \quad \frac{1}{3} \quad \frac{1}{4}$$

.....



$$\frac{1}{6} \quad \frac{1}{5} \quad \frac{1}{4}$$

.....



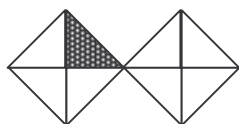
$$\frac{1}{9} \quad \frac{1}{7} \quad \frac{1}{13}$$

.....



$$\frac{1}{10} \quad \frac{1}{9} \quad \frac{1}{8}$$

.....



$$\frac{1}{9} \quad \frac{1}{8} \quad \frac{1}{10}$$

.....



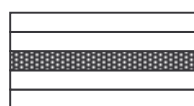
$$\frac{1}{6} \quad \frac{1}{7} \quad \frac{1}{8}$$

.....



$$\frac{1}{5} \quad \frac{1}{6} \quad \frac{1}{7}$$

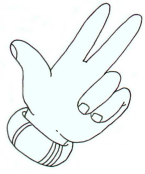
.....



$$\frac{1}{4} \quad \frac{1}{9} \quad \frac{1}{5}$$

.....





Metti in ordine crescente le seguenti unità frazionarie:

$$\frac{8}{25} \quad \frac{2}{25} \quad \frac{4}{25} \quad \frac{3}{25} \quad \frac{24}{25} \quad \frac{7}{25} \quad \frac{9}{25} \quad \frac{15}{25} \quad \frac{25}{25} \quad \frac{16}{25} \quad \frac{6}{25} \quad \frac{1}{25} \quad \frac{10}{25} \quad \frac{12}{25} \quad \frac{20}{25}$$

.....  
.....



Dove hai incontrato maggiori difficoltà? Segna con una crocetta la tua risposta.

- Nell'eseguire il primo esercizio.
- Nell'eseguire il secondo esercizio.
- Nell'eseguire il terzo esercizio.
- Nell'eseguire il quarto esercizio.
- Nell'eseguire il quinto esercizio.
- In nessun esercizio.